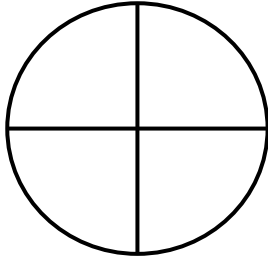


Shade the parts of the figure to match the fraction.

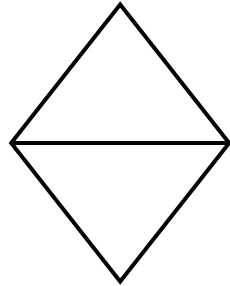
1.

$$\frac{2}{4}$$



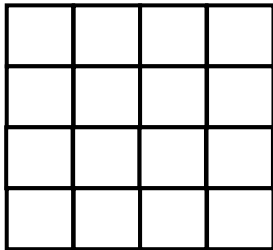
2.

$$\frac{1}{2}$$



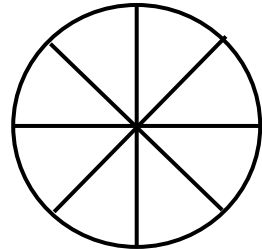
3.

$$\frac{7}{16}$$




4.

$$\frac{3}{8}$$



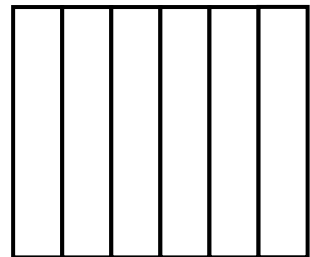
5.

$$\frac{2}{3}$$




6.

$$\frac{4}{6}$$




7.

$$\frac{2}{2}$$




8.

$$\frac{1}{4}$$




9.

$$\frac{2}{3}$$



10.

$$\frac{3}{4}$$





## ANSWERS

### WORKSHEET#4

- 1) shade any 2 parts of the figure out of 4
- 2) shade any 1 part of the figure out of 2
- 3) shade any 7 parts of the figure out of 16
- 4) shade any 3 parts of the figure out of 8
- 5) shade any 2 parts of the figure out of 3
- 6) shade any 4 parts of the figure out of 6
- 7) shade any 2 part of the figure out of 2(full figure)
- 8) shade any 1 parts of the figure out of 4
- 9) shade any 2 parts of the figure out of 3
- 10) shade any 3 parts of the figure out of 4