

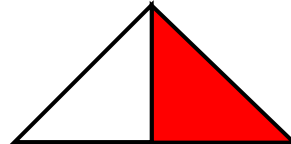
Check what fraction of the figure is shaded and circle the correct answer.

1.




- a) $\frac{1}{4}$ b) $\frac{2}{4}$ c) $\frac{3}{4}$

2.



- a) $\frac{1}{2}$ b) $\frac{2}{2}$

3.



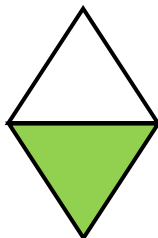
- a) $\frac{3}{12}$ b) $\frac{8}{12}$ c) $\frac{5}{12}$

4.



- a) $\frac{2}{5}$ b) $\frac{3}{5}$ c) $\frac{5}{5}$

5.



- a) $\frac{1}{2}$ b) $\frac{2}{2}$ c) $\frac{3}{2}$

6.



- a) $\frac{3}{4}$ b) $\frac{1}{4}$ c) $\frac{2}{4}$



ANSWERS

WORKSHEET#3

- 1) b 2) a 3) c 4) b 5) a 6) c