


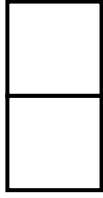
Shade the parts of the figure to match the fraction.

1.



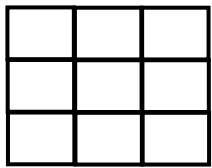
$$\frac{1}{4}$$

2.




$$\frac{1}{2}$$

3.



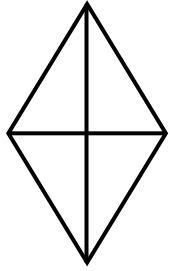
$$\frac{5}{9}$$

4.



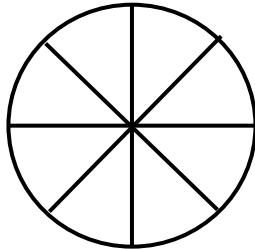
$$\frac{3}{6}$$

5.




$$\frac{2}{4}$$

6.




$$\frac{3}{8}$$

7.



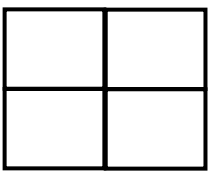
$$\frac{1}{2}$$

8.




$$\frac{2}{3}$$

9.



$$\frac{3}{4}$$

10.



$$\frac{4}{5}$$



ANSWERS

WORKSHEET#2

- 1) shade any 1 part of the figure out of 4
- 2) shade any 1 part of the figure out of 2
- 3) shade any 5 parts of the figure out of 9
- 4) shade any 3 parts of the figure out of 6
- 5) shade any 2 parts of the figure out of 4
- 6) shade any 3 parts of the figure out of 8
- 7) shade any 1 part of the figure out of 2
- 8) shade any 2 parts of the figure out of 3
- 9) shade any 3 parts of the figure out of 4
- 10) shade any 4 parts of the figure out of 5