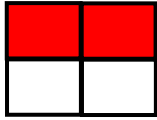


Write the fraction for each shaded figure.

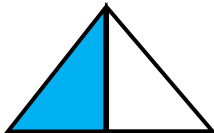
1.




2.



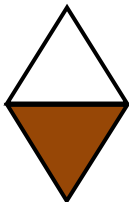
3.




4.



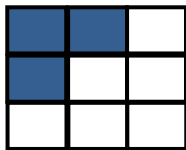
5.



6.



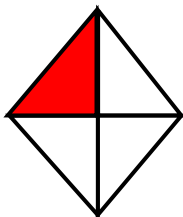
7.




8.



9.



10.





ANSWERS

WORKSHEET#1

1) $2/4$

2) $3/5$

3) $1/2$

4) $1/4$

5) $1/2$

6) $2/2$

7) $3/9$

8) $2/6$

9) $1/4$

10) $1/3$