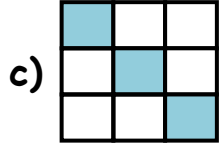
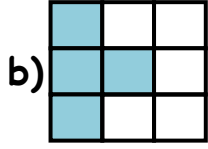
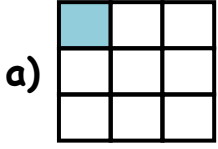
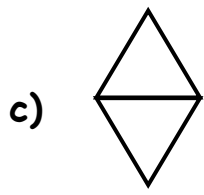
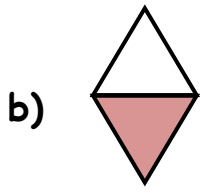
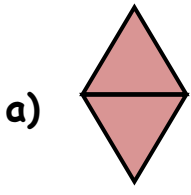


Circle which figure shows the exact fraction.

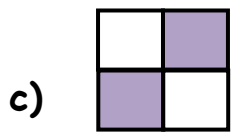
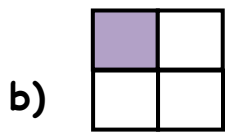
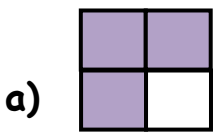
1.  $\frac{4}{9}$



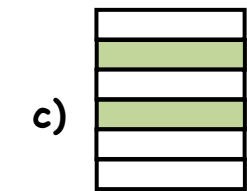
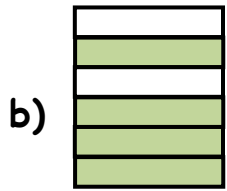
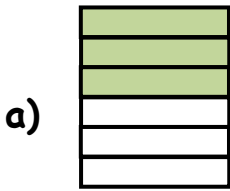
2.  $\frac{2}{2}$



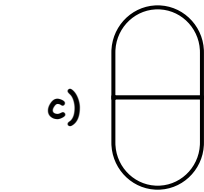
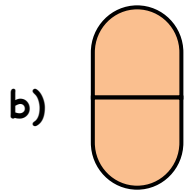
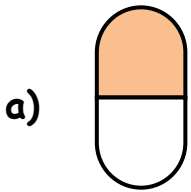
3.  $\frac{3}{4}$



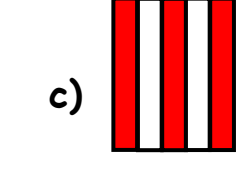
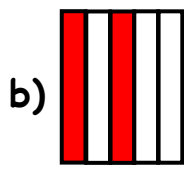
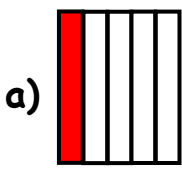
4.  $\frac{4}{6}$



5.  $\frac{1}{2}$



6.  $\frac{3}{5}$





**ANSWERS**

**WORKSHEET#10**

1) b

2) a

3) a

4) b

5) a

6) c