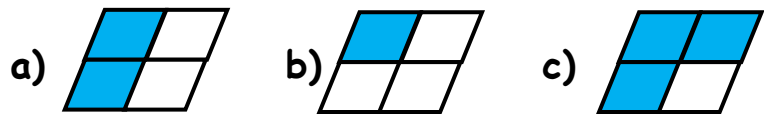
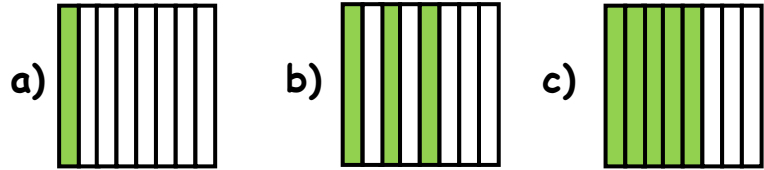


Circle which figure shows the exact fraction.

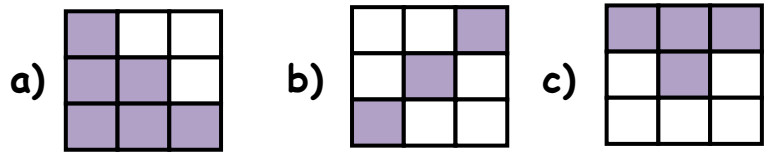
1. $\frac{2}{4}$



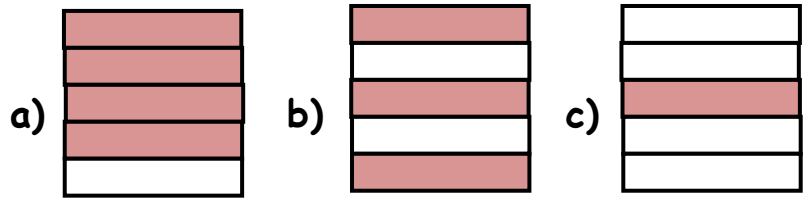
2. $\frac{3}{8}$



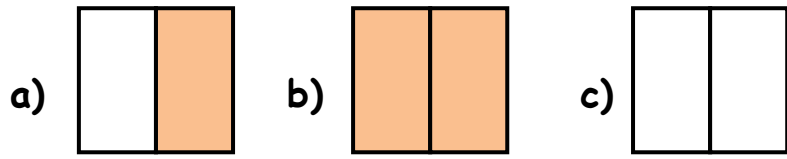
3. $\frac{4}{9}$



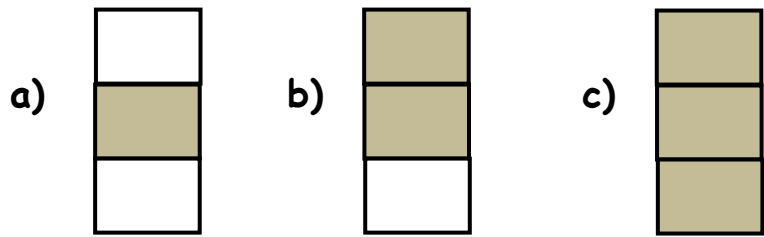
4. $\frac{3}{5}$



5. $\frac{2}{2}$



6. $\frac{1}{3}$





ANSWERS

WORKSHEET#9

- 1) a 2) b 3) c 4) b 5) b 6) a