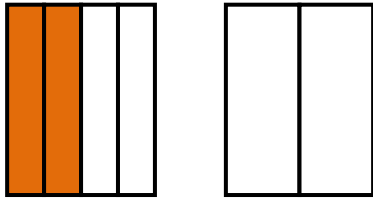


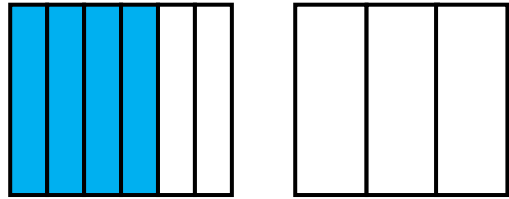
Color each shape to show an equivalent fraction. Write the fractions below the shapes.

1.



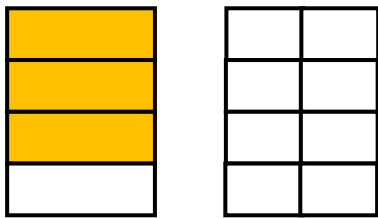
\_\_\_\_\_ = \_\_\_\_\_

2.



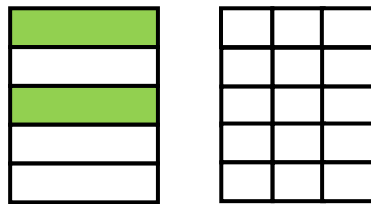
\_\_\_\_\_ = \_\_\_\_\_

3.



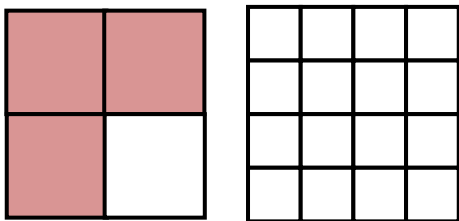
\_\_\_\_\_ = \_\_\_\_\_

4.



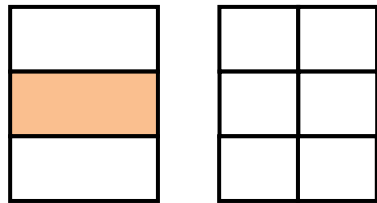
\_\_\_\_\_ = \_\_\_\_\_

5.



\_\_\_\_\_ = \_\_\_\_\_

6.



\_\_\_\_\_ = \_\_\_\_\_



## ANSWERS

### WORKSHEET#8

- 1)  $2/4 = 1/2$  (color any 1 part of the figure out of 2)
- 2)  $4/6 = 2/3$  (color any 2 parts of the figure out of 3)
- 3)  $3/4 = 6/8$  (color any 6 parts of the figure out of 8)
- 4)  $2/5 = 6/15$  (color any 6 parts of the figure out of 15)
- 5)  $3/4 = 12/16$  (color any 12 parts of the figure out of 16)
- 6)  $1/3 = 2/6$  (color any 2 parts of the figure out of 6)