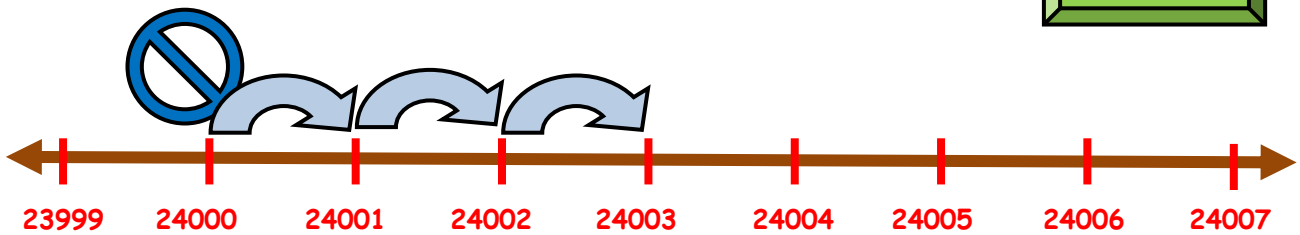


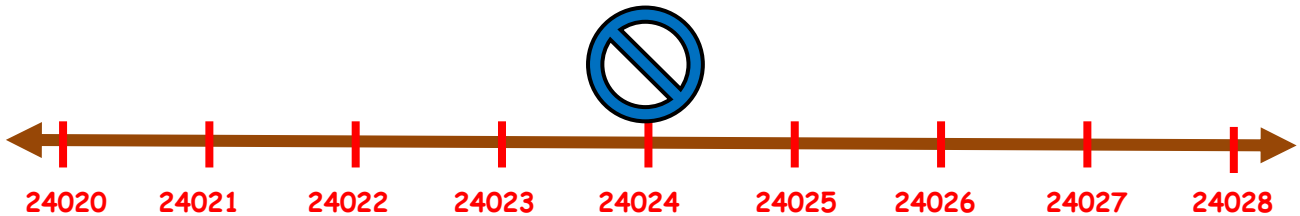

HELP THE BALL JUMP FORWARD AND BACKWARD!

1. A wheel is at the number 24000 on the number line. How many jumps will it take to reach the number 24003?



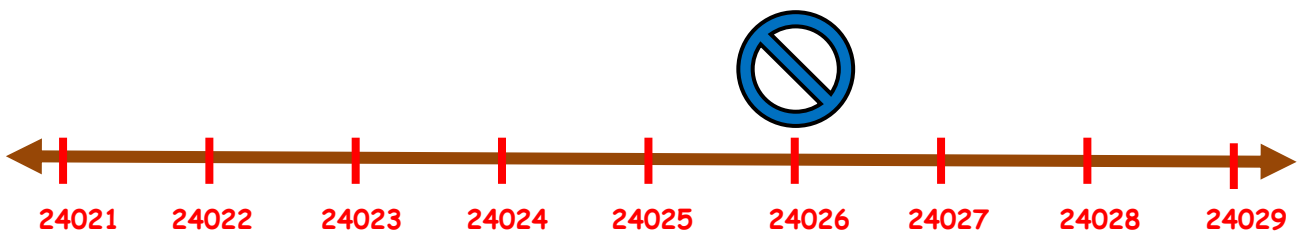
2. The wheel kept rolling and stopped at number 24024 on the number line. How many more jumps will it make to reach 24026?

Make the arrows to show the jumps.



3. After getting to the number 24026, it wants to go back to 24021. How many jumps will it take backwards to get there?

Make the arrows to show the jumps.





ANSWERS

WORKSHEET#7

1) 3

2) 2

3) 5