



WORKSHEET#3


Solve the following basic addition sums using the number line.

1.  $67001 + 3 =$  




2.  $87888 + 4 =$  



3.  $20023 + 1 =$  



4.  $80802 + 2 =$  





**ANSWERS**

**WORKSHEET#3**

1) 67004

2) 87892

3) 20024

4) 80804