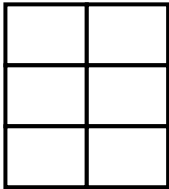
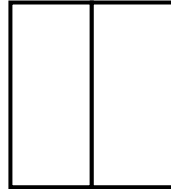



Shade the figure and compare the fractions. Use  $<$ ,  $>$  or  $=$ .

1.




$$\frac{3}{6}$$





$$\frac{1}{2}$$

2.

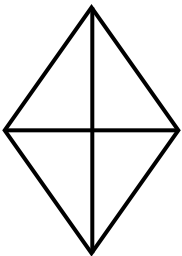


$$\frac{2}{4}$$

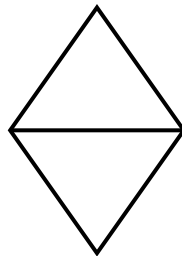



$$\frac{7}{8}$$

3.

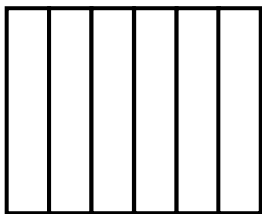


$$\frac{3}{4}$$

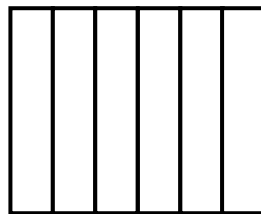



$$\frac{1}{2}$$

4.

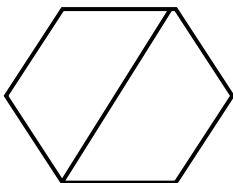


$$\frac{2}{6}$$

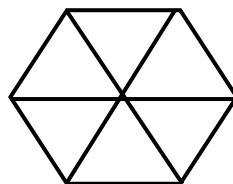



$$\frac{5}{6}$$

5.



$$\frac{1}{2}$$



$$\frac{2}{6}$$



**ANSWERS**

**WORKSHEET#6**

1) =

2) <

3) >

4) <

5) >