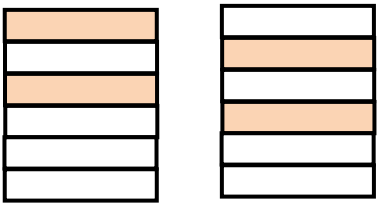

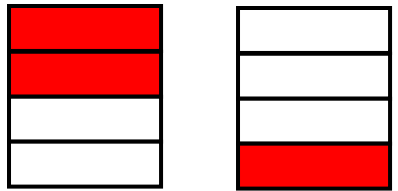

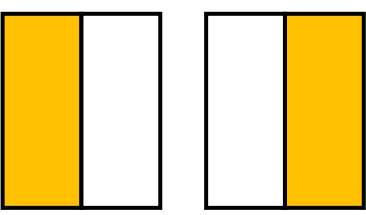

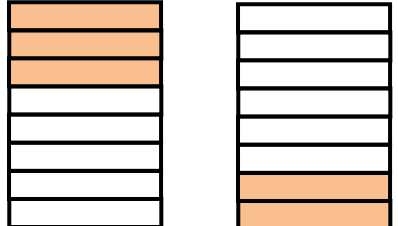



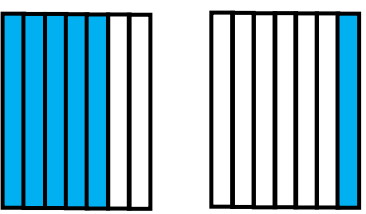

Write the fractions for the shaded figures and then add them.

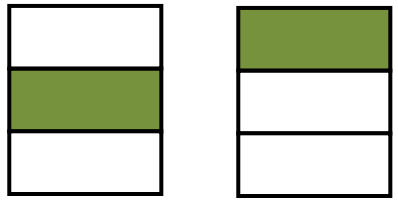

1.    
 \_\_\_\_\_ + \_\_\_\_\_ = 

2.    
 \_\_\_\_\_ + \_\_\_\_\_ = 

3.    
 \_\_\_\_\_ + \_\_\_\_\_ = 

4.    
 \_\_\_\_\_ + \_\_\_\_\_ = 

5.    
 \_\_\_\_\_ + \_\_\_\_\_ = 

6.    
 \_\_\_\_\_ + \_\_\_\_\_ = 



## ANSWERS

### WORKSHEET#8

1)  $2/6 + 2/6 = 4/6$

2)  $2/4 + 1/4 = 3/4$

3)  $1/2 + 1/2 = 2/2$

4)  $3/8 + 2/8 = 5/8$

5)  $5/7 + 1/7 = 6/7$

6)  $1/3 + 1/3 = 2/3$