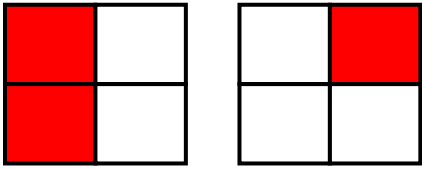

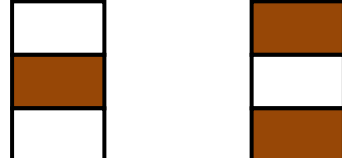

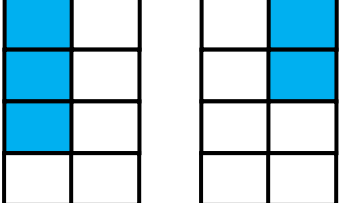





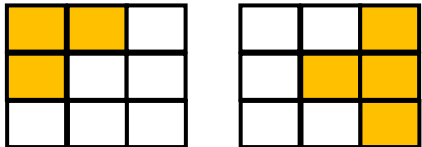

Write the fractions for the shaded figures and then add them.

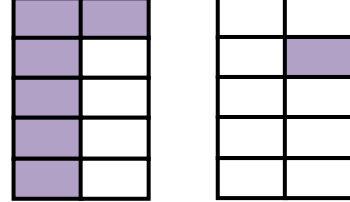

1.   
 \_\_\_ + \_\_\_ = 

2.   
 \_\_\_ + \_\_\_ = 

3.   
 \_\_\_ + \_\_\_ = 

4.   
 \_\_\_ + \_\_\_ = 

5.   
 \_\_\_ + \_\_\_ = 

6.   
 \_\_\_ + \_\_\_ = 



## ANSWERS

### WORKSHEET#1

1)  $2/4 + 1/4 = 3/4$

2)  $1/3 + 2/3 = 3/3$

3)  $3/8 + 2/8 = 5/8$

4)  $3/5 + 1/5 = 4/5$

5)  $3/9 + 4/9 = 7/9$

6)  $6/10 + 1/10 = 7/10$