
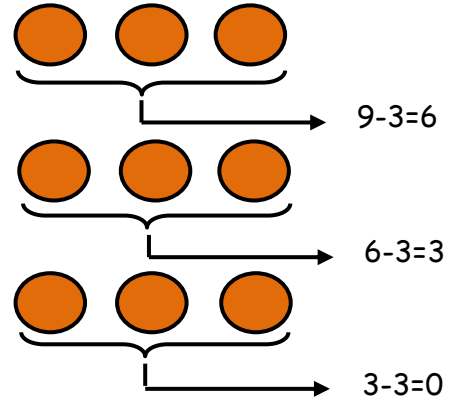


Use repeated subtraction to find the number of equal groups in the following word problems.


1. Subtract groups of 3 from these 9 balls.

How many groups of 3 you can make out of these?  **3 groups**

Division equation : 9 ÷ 3 = 3




2. Simon has to make groups of 6 from these 30 stars. How many groups of 4 stars he can

Make out of these? 


Division equation : _____



3. Subtract groups of 4 from these 24 diamonds.


How many groups of 4 you can make out of these? 

Division equation : _____

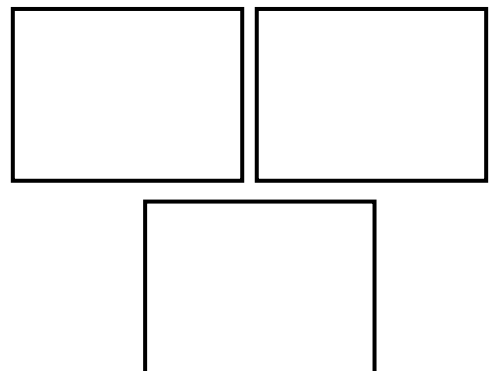


4. Share 15 squares  among three boxes.

How many squares will each box carry?

 Each box will carry _____ squares.

Division equation : _____





Answers

WORKSHEET#9

1) 3 groups ; $9 \div 3 = 3$

2) 5 groups ; $30 \div 6 = 5$

3) 6 groups ; $24 \div 4 = 6$

4) each box will carry 5 squares ; division equation : $15 \div 3 = 5$