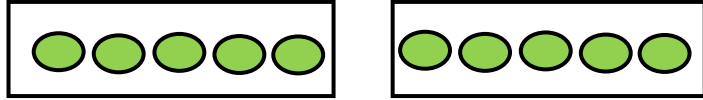
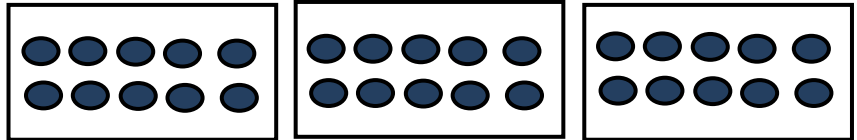


Solve the following division problems with the help of figures.


1. $10 \div 2 =$




2. $30 \div 3 =$



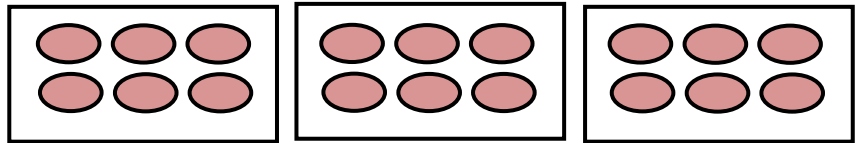
3. $45 \div 5 =$



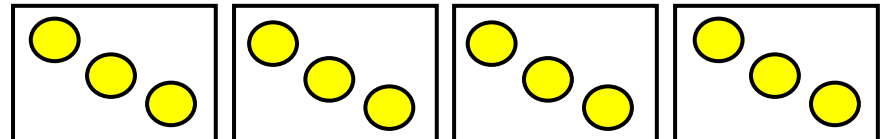
4. $28 \div 7 =$



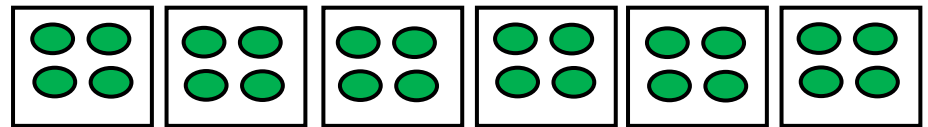
5. $18 \div 3 =$



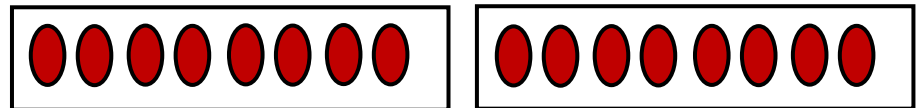
6. $12 \div 4 =$



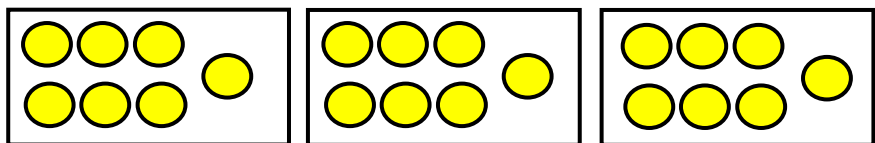
7. $24 \div 6 =$



8. $16 \div 2 =$



9. $21 \div 3 =$





ANSWERS

WORKSHEET#8

1) 5

2) 10

3) 9

4) 4

5) 6

6) 3

7) 4

8) 8

9) 7