


Solve the following division problems.

1. Divide 20 stars in 4 groups.

Each group has stars.

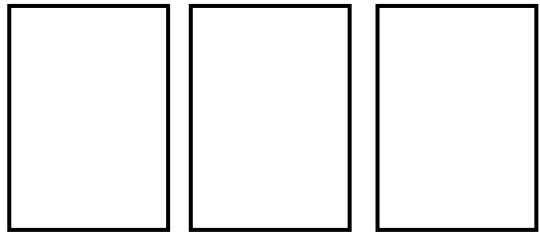
Division equation : $20 \div 4 = 5$



2. Divide 39 balls in 3 groups.

Each group has stars.


Division equation : _____



3. Divide 30 stars in 2 groups.

Each group has stars.

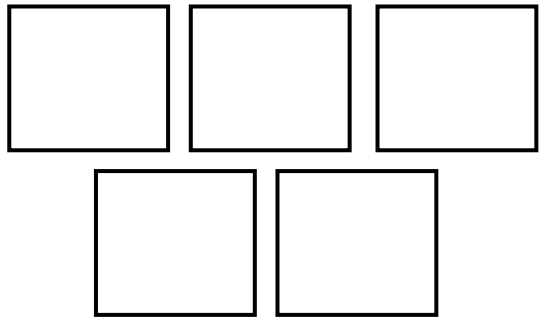
Division equation : _____



4. Divide 45 balls in 5 groups.

Each group has stars.

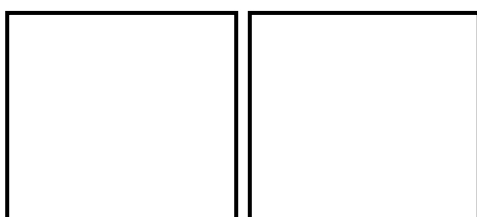
Division equation : _____



5. Divide 10 stars in 2 groups.

Each group has stars.

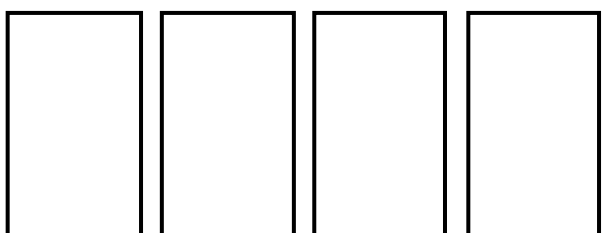
Division equation : _____



6. Divide 36 balls in 4 groups.

Each group has stars.

Division equation : _____





ANSWERS

WORKSHEET#7

1. 5 ; $20 \div 4 = 5$

2. 13 ; $39 \div 3 = 13$

3. 15 ; $30 \div 2 = 15$

4. 9 ; $45 \div 5 = 9$

5. 5 ; $10 \div 2 = 5$

6. 9 ; $36 \div 4 = 9$