



Circle the groups and find the quotient. Also write the division equation.

1. Divide the followings in groups of 7. Write the division equation.




Division Equation :

2. Divide the followings in groups of 2. Write the division equation.




Division Equation :

3. Divide the followings in groups of 6. Write the division equation.



Division Equation :

4. Divide the followings in groups of 3. Write the division equation.



Division Equation :



## ANSWERS

### WORKSHEET#5

1.  $21 \div 7 = 3$

2.  $8 \div 2 = 4$

3.  $24 \div 6 = 4$

4.  $15 \div 3 = 5$