
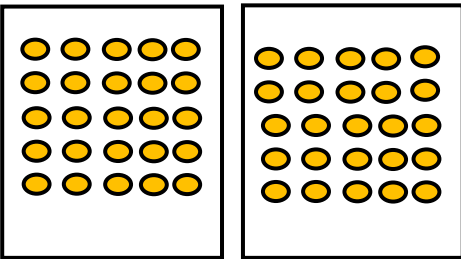




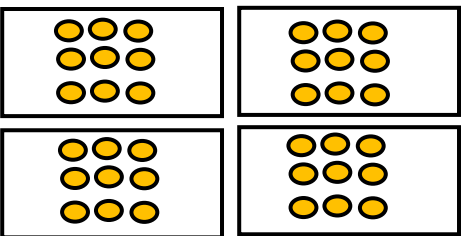
Write the division equation for the following grouping problem.

1.  \rightarrow $\underline{32} \div \underline{4} = \underline{8}$

2.  \rightarrow $\underline{\quad} \div \underline{\quad} = \underline{\quad}$

3.  \rightarrow $\underline{\quad} \div \underline{\quad} = \underline{\quad}$

4.  \rightarrow $\underline{\quad} \div \underline{\quad} = \underline{\quad}$

5.  \rightarrow $\underline{\quad} \div \underline{\quad} = \underline{\quad}$



ANSWERS

WORKSHEET#2

1. $32 \div 4 = 8$

2. $50 \div 2 = 25$

3. $36 \div 3 = 12$

4. $12 \div 6 = 2$

5. $36 \div 4 = 9$