




Solve the following sums using the expanded form. Also do regrouping where required. Show the full working in the space given.

1.
$$\begin{array}{r} 41614 \\ + 24653 \\ \hline \\ \hline \end{array}$$
 

2.
$$\begin{array}{r} 34324 \\ + 47654 \\ \hline \\ \hline \end{array}$$
 

3.
$$\begin{array}{r} 24772 \\ + 25346 \\ \hline \\ \hline \end{array}$$
 



ANSWERS

WORKSHEET#6

1) 66264

2) 81978

3) 50118