


Solve the following addition sums using *Expanded Form*.

NOTE: Show your full working.


1.  $452 + 542 =$  \_\_\_\_\_

$$\begin{array}{r} 452 \\ + 542 \\ \hline \end{array} \Rightarrow \begin{array}{r} 400 + 50 + 2 \\ + 500 + 40 + 2 \\ \hline 900 + 90 + 4 \\ 900 + 90 + 4 = 994 \\ 452 + 542 = 994 \end{array}$$


2.  $125 + 133 =$  \_\_\_\_\_



3.  $457 + 301 =$  \_\_\_\_\_



4.  $617 + 282 =$  \_\_\_\_\_





**ANSWERS**

**WORKSHEET#1**

1) 994

2) 258

3) 758

4) 899