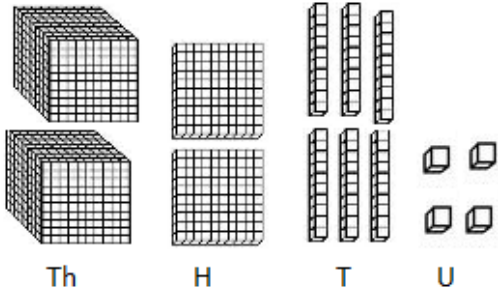
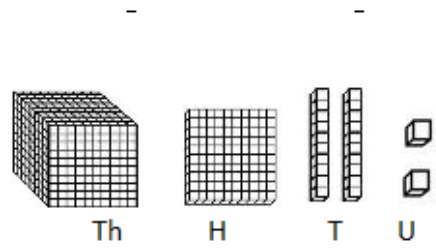


Write the numbers shown by the blocks.

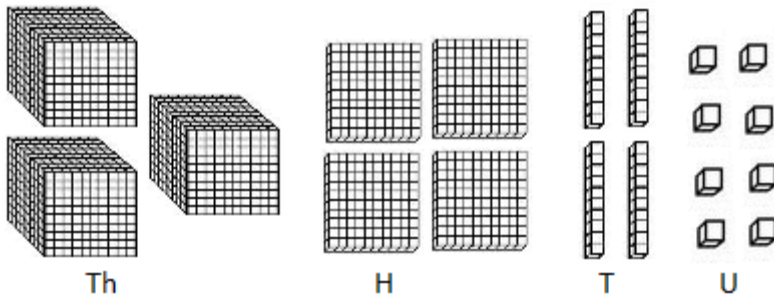
1)  $2000 + 200 + 60 + 4 = 2264$



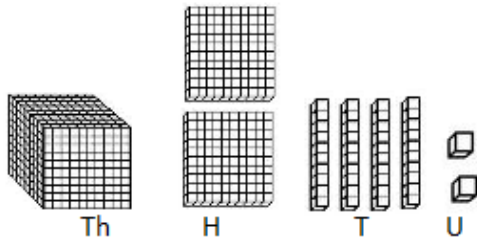
2) \_\_\_\_\_



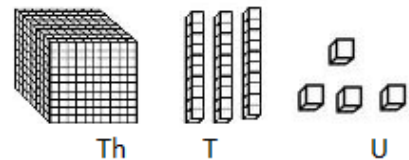
3) \_\_\_\_\_



4) \_\_\_\_\_



5) \_\_\_\_\_





## ANSWERS

### Worksheet # 3

1)  $2000+200+60+4 = 2264$

2)  $1000+100+20+2 = 1122$

3)  $3000+400+40+8 = 3448$

4)  $1000+200+40+2 = 1242$

5)  $1000+30+4 = 1034$