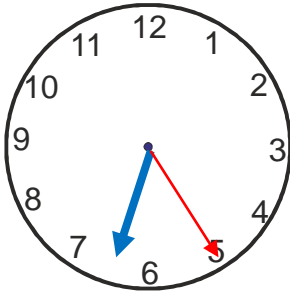


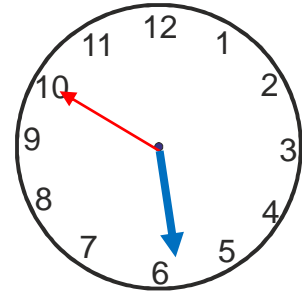
Reading the time

1 Write the time on the clock faces in numbers and in words

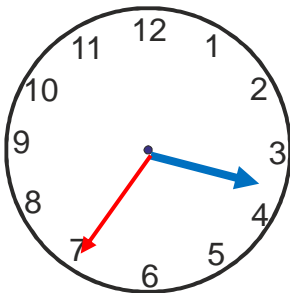


6:25

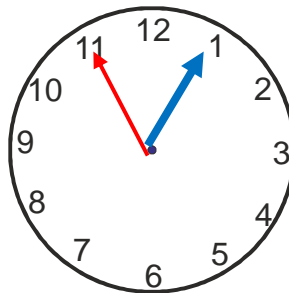
Twenty five minutes past six



2 Write the time given on the clock faces. What is the difference in time?



03:35



12:55

Difference in time

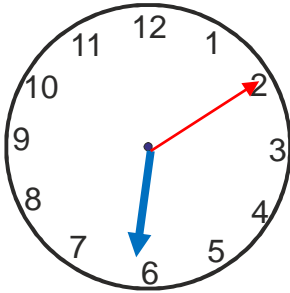
02:40 hours

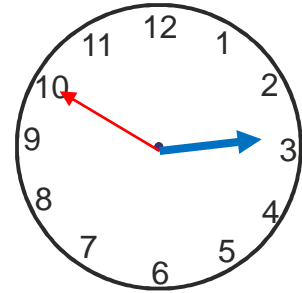
3 Ali was to reach his friend's house at 30 minutes past 4. He reached at 10 minutes past 4. Was he early or was he late? What was the time difference?

Ali was late by 50 minutes.

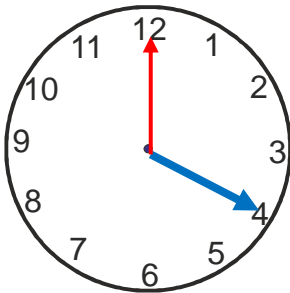
Reading the time

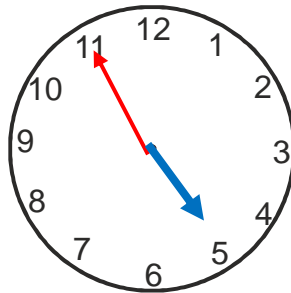
1 Write the time on the clock faces in numbers and in words





2 Write the time given on the clock faces. What is the difference in time?



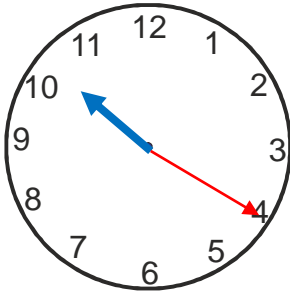


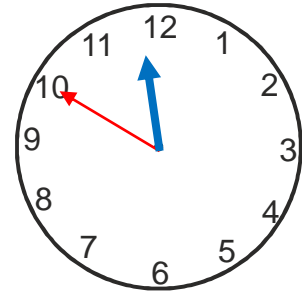
Difference in time

3 The train reached at 55 minutes past 8. The scheduled time was 30 minutes past 8. How late was the train?

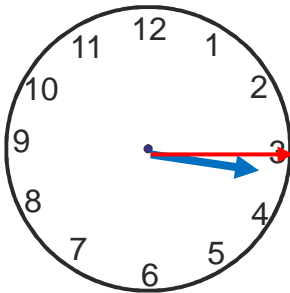
Reading the time

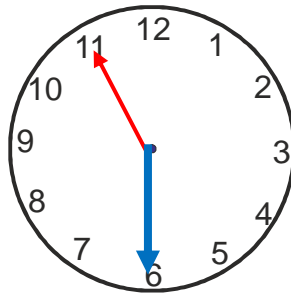
1 Write the time on the clock faces in numbers and in words





2 Write the time given on the clock faces. What is the difference in time?



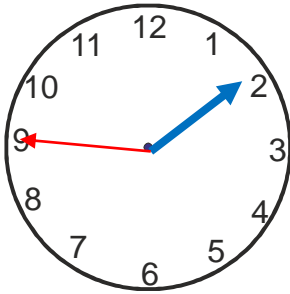


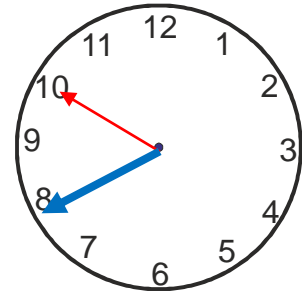
Difference in time

3 Sohail reached the school 5 minutes past 9. If Salma had reached 15 minutes earlier, what time did she reach school?

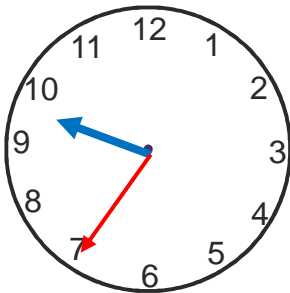
Reading the time

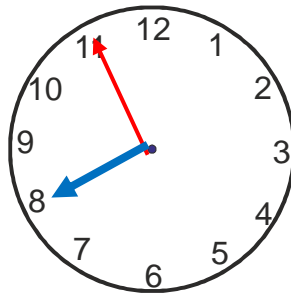
1 Write the time on the clock faces in numbers and in words





2 Write the time given on the clock faces. What is the difference in time?



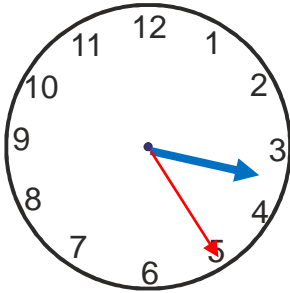


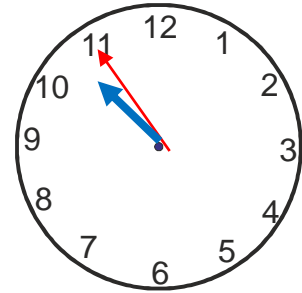
Difference in time

3 Samina reached Ishrat's place 15 minutes before the function. If Samina reached at 12: 45 pm, what time was the function?

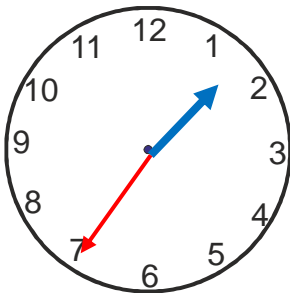
Reading the time

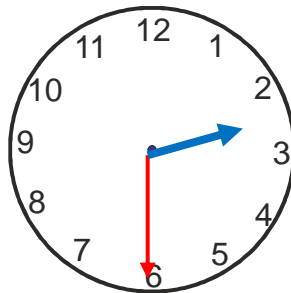
1 Write the time on the clock faces in numbers and in words





2 Write the time given on the clock faces. What is the difference in time?



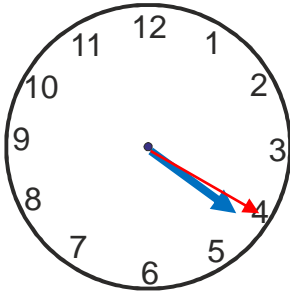


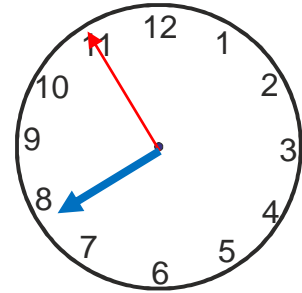
Difference in time

3 Rains delayed a cricket match by 3:45 minutes. If the scheduled match time was 10:30am, what time did the match actually start?

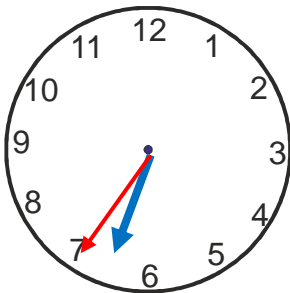
Reading the time

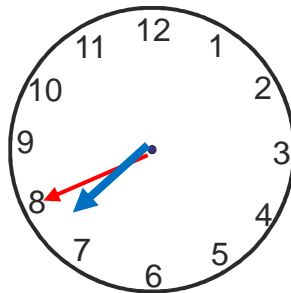
1 Write the time on the clock faces in numbers and in words





2 Write the time given on the clock faces. What is the difference in time?



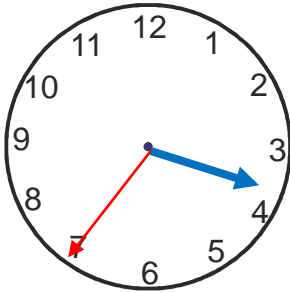


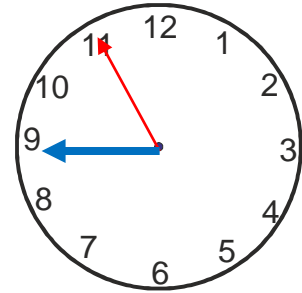
Difference in time

3 Carole reached her friend's house at 25 minutes late. If she reached at 5 minutes past 1, what time should she have reached?

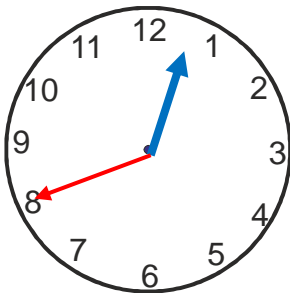
Reading the time

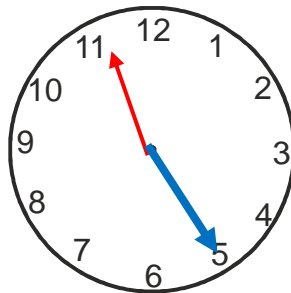
1 Write the time on the clock faces in numbers and in words





2 Write the time given on the clock faces. What is the difference in time?



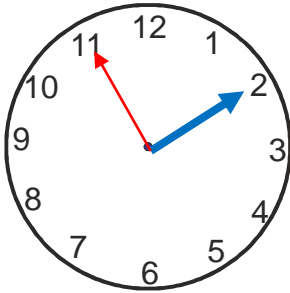


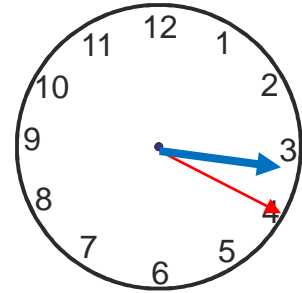
Difference in time

3 A watch goes 10 minutes fast every hour. If it showed the correct time at 4pm, what time will it show at 6 pm?

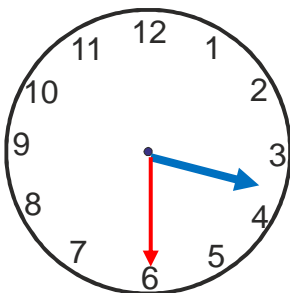
Reading the time

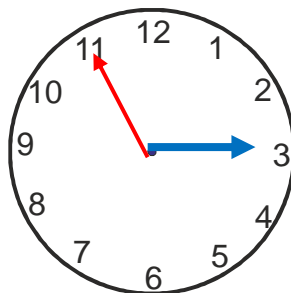
1 Write the time on the clock faces in numbers and in words





2 Write the time given on the clock faces. What is the difference in time?



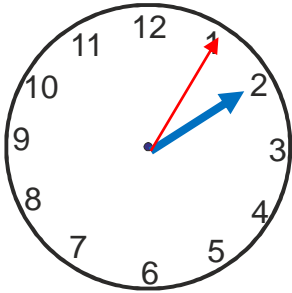


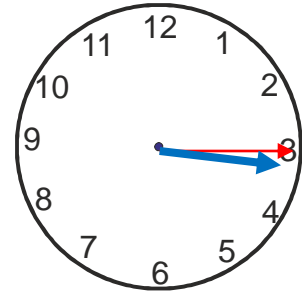
Difference in time

3 There is a bus to go to Doha after every 2 hours 30 minutes. When is the next bus if the last bus left at 10 minutes past 5?

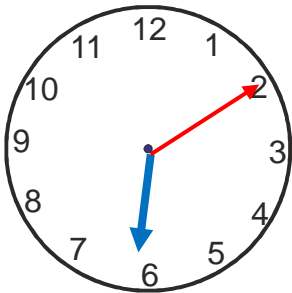
Reading the time

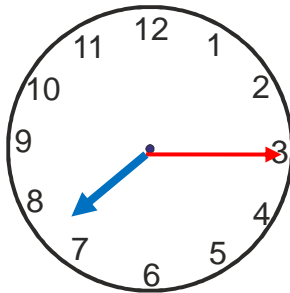
1 Write the time on the clock faces in numbers and in words





2 Write the time given on the clock faces. What is the difference in time?



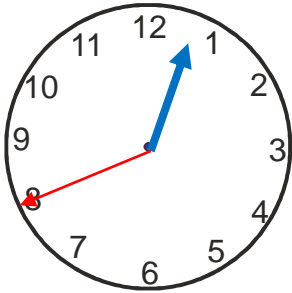


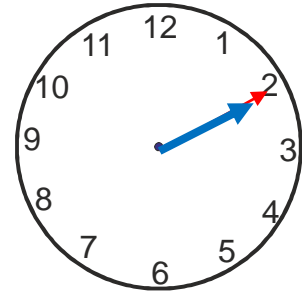
Difference in time

3 A football match lasted for 2 hours and 5 minutes. If it started at 15 minutes past 10, what time did it get over?

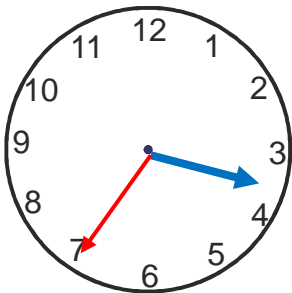
Reading the time

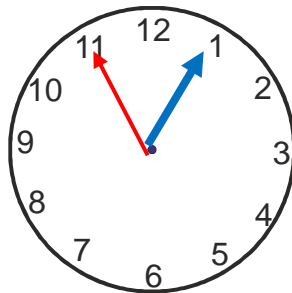
1 Write the time on the clock faces in numbers and in words





2 Write the time given on the clock faces. What is the difference in time?





Difference in time

3 A music band played for 2 hours 5 minutes. If the band finished playing at 10 minutes past 11, what time did they start?
